




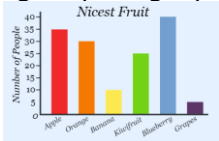




Autumn Term 2 Year 5 Home Learning Grid

Choose one task to complete each week (you can do more than one task a week if you wish). Please learn your spellings for a weekly spelling test each Wednesday.

<p>Write a creative story of your choice!</p> 	<p>Find out as many facts about the South America and the Amazon Basin.</p> 	<p>Find out about air resistance and present your findings in a poster with text and diagrams.</p> 	<p>Research and create a fact file about a famous individual from history who has promoted world peace. ie Martin Luther King, Gandhi, Nelson Mandela.</p> 												
<p>Write a review of your favourite game.</p>  <p>Include a short summary of the game, describe the main challenge and explain why you like it.</p>	<p>Conduct a survey amongst a group of 10+ people, finding out what their favourite fruit or animal is. Perhaps present them with only 4 options and record your results in a tally chart. Now can you create a simple bar chart to present the results. Remember to label your axis and give your graph a title.</p>  <table border="1"> <caption>Nicest Fruit</caption> <thead> <tr> <th>Fruit</th> <th>Number of People</th> </tr> </thead> <tbody> <tr> <td>Apple</td> <td>35</td> </tr> <tr> <td>Orange</td> <td>30</td> </tr> <tr> <td>Banana</td> <td>10</td> </tr> <tr> <td>Blueberry</td> <td>25</td> </tr> <tr> <td>Grapes</td> <td>5</td> </tr> </tbody> </table>	Fruit	Number of People	Apple	35	Orange	30	Banana	10	Blueberry	25	Grapes	5	<p>Can you write some word problems involving addition and subtraction? Then ask someone at home to complete them! You can then check if they answered your questions correctly.</p> 	<p>Draw or paint a picture of a character from your favourite book.</p> 
Fruit	Number of People														
Apple	35														
Orange	30														
Banana	10														
Blueberry	25														
Grapes	5														